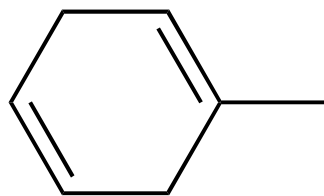
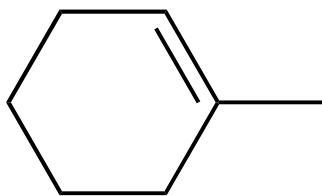


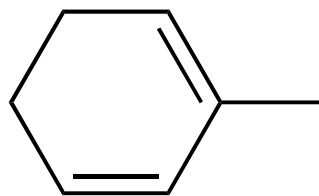
Arrange the following compounds in order of INCREASINGLY NEGATIVE heats of hydrogenation (from smallest  $\Delta H$  to largest).



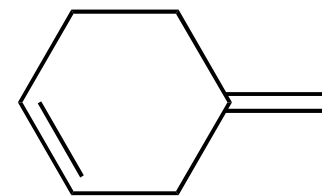
**I**



**II**



**III**



**IV**

A) III < I < IV < II

B) II < III < I < IV

C) IV < II < I < III

D) II < IV < I < III

E) III < I < II < IV