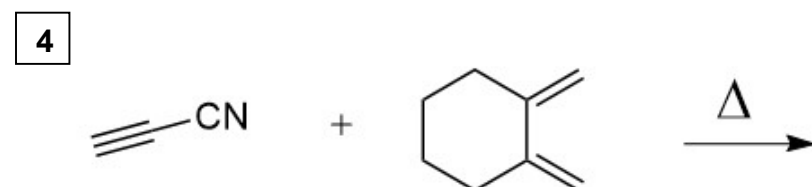
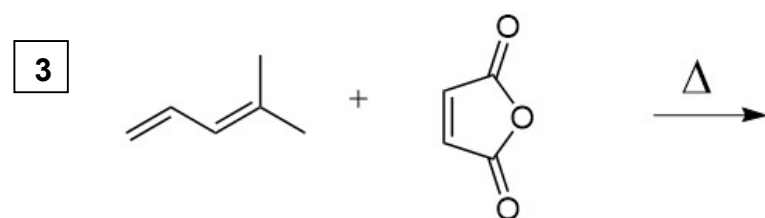
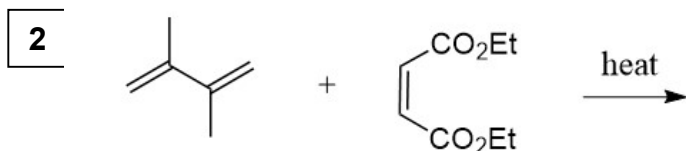
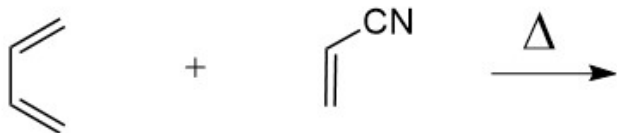


Organic Chemistry II CHM 3150  
Dr. Laurie S. Starkey, Cal Poly Pomona  
Chapter 16, Conjugated Dienes, Part 2– [Practice Problems](#)

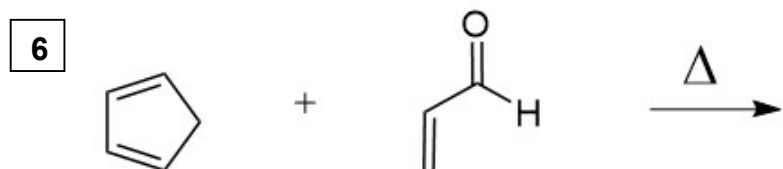
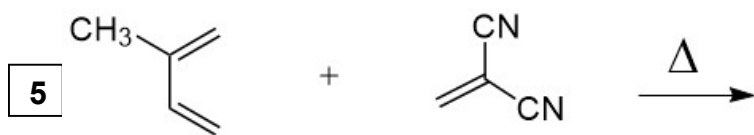
For clicker question voting, go to:  
<https://pollev.com/lauriestarke263>



1 Predict the major product expected.



Predict the major product expected.



Which of the following represents the best retrosynthesis of the given target molecule (TM)?

