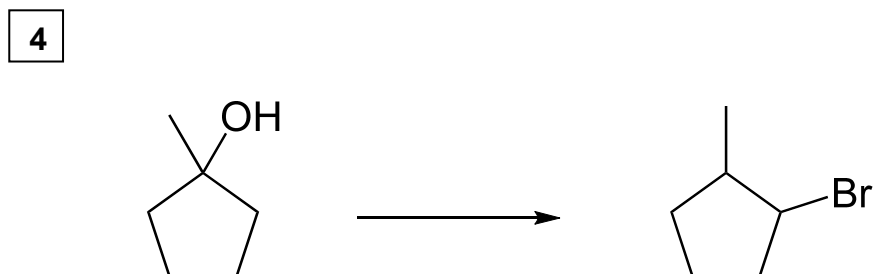
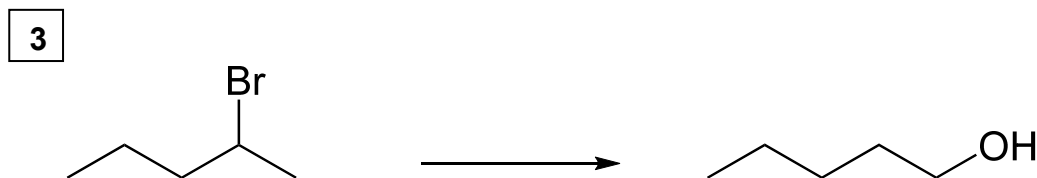



CHM 3140 Organic Chem. II, Dr. Starkey, Cal Poly Pomona
Ch. 11 Synthesis #2 (& Review Ch. 7-10) – [Practice Problems](#)

For clicker question voting, go to:
<https://pollev.com/lauriestarke263>
LAURIESTARKE263 to 37607



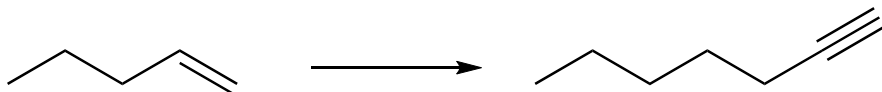
Provide the reagents necessary to achieve each transformation. Draw the intermediate structure(s).



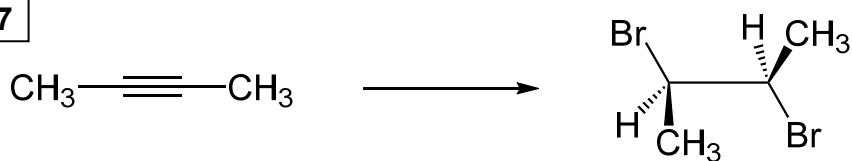
5



6



7



8

