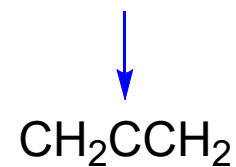
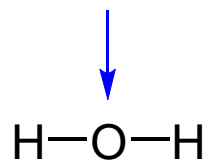
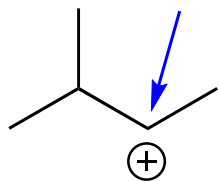


Identify the hybridization for each of the following indicated atoms.



A) sp^3

sp

sp

B) sp^2

sp^3

sp

C) sp^3

sp

sp^2

D) sp^3

sp^3

sp^2

E) sp^2

sp^2

sp^2