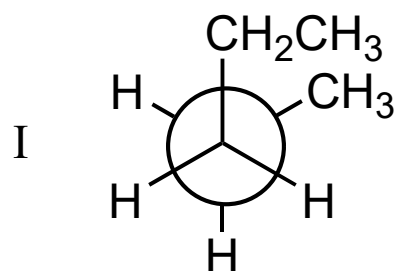
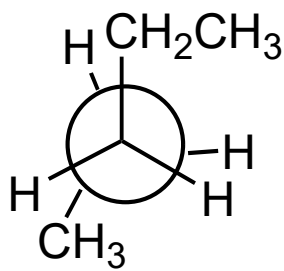


Which of the following pairs are examples of **conformers**?



and



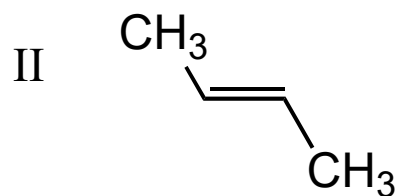
A) I only

B) III only

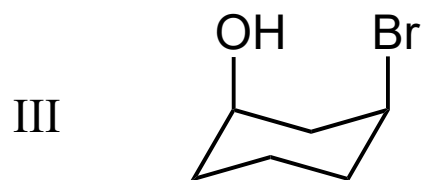
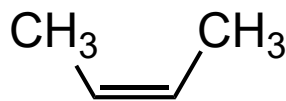
C) I and II only

D) I and III only

E) I, II and III



and



and

