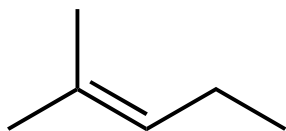
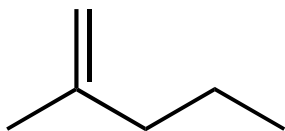


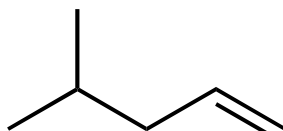
Arrange the following alkenes from MOST stable to LEAST stable.



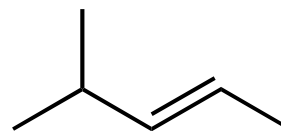
A



B



C



D

A) $B > D > C > A$

B) $A > D > B > C$

C) $D > A > B > C$

D) $D > A > C > B$

E) $A > B > D > C$