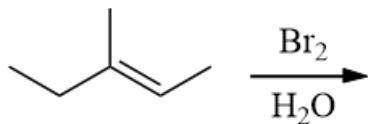


Dr. Laurie S. Starkey, CHM 3140 Organic Chemistry I, Cal Poly Pomona  
Chapter 8 Alkene Reactions, Part 2 – [Practice Problems](#)

1

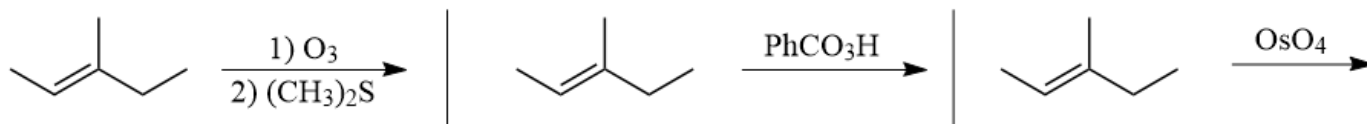
Predict the major product.



Mechanism:

Predict the major products for the following reactions.

2

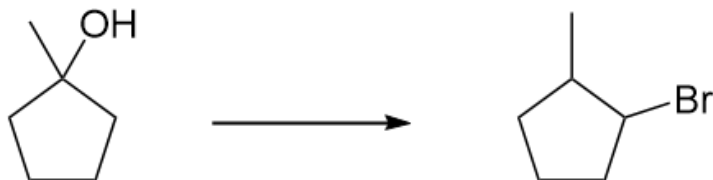


Which reagents would be best to achieve the following synthesis?

3



4

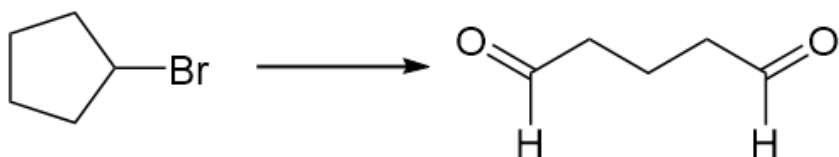


Which reagents would be best to achieve the following synthesis?

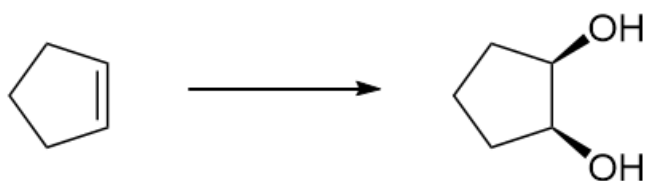
5



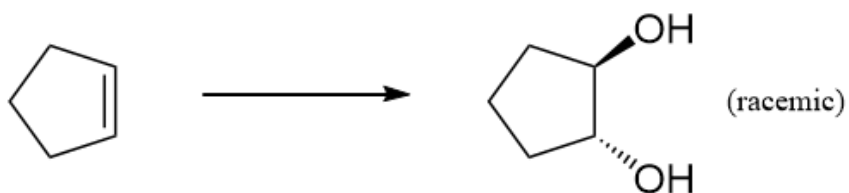
6



7



8



9

